



Holiday Homework

Class II



SUMMER VACATION

Dear Parents,

- ❖ Long awaited Summer Holidays have commenced. It is a time to relax, rejuvenate, refresh and regain health. It is also a time to reduce stress & increase productivity.
- ❖ Spend quality time with your kids and inculcate values.
- ❖ Help and guide your ward in doing Holiday Homework.
- ❖ Encourage your ward to converse in English.
- ❖ Do some kind of physical exercises with your kids.
- ❖ Read the Newspaper every day and encourage your ward to do so.

BE HEALTHY, BE HAPPY

Regards
GTB-011-46575555

Guru Tegh Bahadur 3rd Centenary Public School
C- Block, Mansarovar Garden, New Delhi -15
Holiday Home Work 2022-23
Class II

English

1. Learn poem 'The Swing' and 'Walk with Grandpa' for reading and recitation test in July.
2. Revise syllabus for Ist Monthly Test in July.
3. Cursive writing book- complete pages (2 to 11)
4. Activity- Draw your favourite cartoon character on A3 size sheet and write a quote on it according to your Roll No:
Roll No. 1 - 20 (Health and Hygiene)
Roll No. 21 - 40 (Cleanliness)

Hindi

1. कविता सूरज तथा इब्रबतूता याद करो (For reading and recitation test in July)
2. हिंदी सुलेख माला (Page 10-20)
3. करवाए गए पाठों को दोहराओ
4. गतिविधि
विलोम शब्द (Roll No- 1 to 12) (https://www.youtube.com/watch?v=E_h-ywoeZqA)
लिंग बदलो (Roll No- 13 to 24)
(<https://www.youtube.com/watch?v=AWKwn8LMDsS&feature=youtu.be>)
समानार्थक शब्द (Roll No- 25 to 40)
(<https://www.youtube.com/watch?v=tMOfjKgfdRA&feature=youtu.be>)
दिए गए यूट्यूब लिंक द्वारा सीखो और बनाओ।

Maths

1. Learn tables of 2, 3, 4, 5, 6 & 10.
2. Practice 5 sums daily of (addition with carry over, word sums)
3. Activity - Make any article using geometrical shapes. Ex- Train, Rocket, House etc.

EVS

Make a collage/ poster on A4 size sheet on the following topic.

- Way to keep yourself clean, fit and Healthy (Roll No. 1 - 7)
- My Country 'My Pride' (Roll No. 8 - 15)
- Reduce, Reuse, Recycle waste (Roll No. 16 - 24)
- Cut out on A3 size sheet of any animal/ bird / butterfly / flower. (Roll No. 25 - 40)

Computer

- Draw / print all the 'Parts of Computer' on A4 size sheet and paste it in copy.
- Learn Lesson 1 for the forthcoming Monthly Test I.

GK

Learn the questions given in the worksheet.

Art

- ✍ Do page no.-15,24,27,34,42,48 (You have to do all the work in your Art book.)
- ✍ Make 5 different shapes with the help of matchsticks and paste them in your sketch book.

Each activity will be assessed and marks will be given. So complete your work neatly and beautifully.

Divinity

Revise the syllabus shared in the study group.

Worksheet - Complete the worksheets of English, Hindi, Maths, EVS and GK.

STAY HOME STAY SAFE

Name: _____ Class & Sec. _____ Roll No. _____ Date: _____

Q1. Read the following passage and answer the questions:



Ben and Jen are happy because it is snowing outside. Ben likes to go sledding. He is hoping to try his new sled. Jen likes to go ice skating on the pond. He saved his money and bought a new pair of ice skates. They both love to build a snowman in the backyard.

Questions

1. Why are Ben and Jen happy?

Ans. _____

2. What is Ben hoping?

Ans. _____

3. What did Jen buy?

Ans. _____

4. Where do they build their snowman?

Ans. _____

Q2. Change the gender of the following words with the help of the box given below.

mother**hen****peahen****girl****bride****princess****tigress****cow****niece****aunt****lioness****mare****wife****daughter**

- boy _____
- prince _____
- uncle _____
- lion _____
- father _____
- nephew _____
- cock _____
- horse _____
- peacock _____
- groom _____
- son _____
- tiger _____
- husband _____
- bull _____

Q3. Underline the proper nouns in these sentences.

1. I live in Mumbai.
2. Scooby is a brown dog.
3. India won the cricket match.

Q4. Write the antonyms of the following words.

1. awake-
2. before-
3. fresh-
4. begin-
5. sharp-
6. cheap-

Q5. Fill in the blanks with is, am or are.

1. You _____ drinking orange juices.
2. I _____ not feeling well.
3. The boys _____ playing cricket.
4. She _____ not going to the park.

Q6. Punctuate the following sentences.

1. my name is cinderella
2. akhil has a blue car
3. sunday is a holiday

Q7. Write 5 sentences on My Mother.

1. _____
2. _____
3. _____
4. _____
5. _____

Name: _____ Class & Sec. _____ Roll No. _____ Date: _____

Q1. Read the passage and answer the following questions.

Chotu was a small boy. He was poor. He swept floors and washed cars in Jhilmil Colony. Chotu wanted to study but had no money to go school. He did not have parents. He lived on the streets. Big boys often hit him.

Q1) Who was Chotu?

A1)

Q2) What work did Chotu do?

A2)

Q3) Why did Chotu not go to school?

A3)

Q4) Give the opposite of the following.

a) small- _____

b) poor- _____

Q2. Fill in the blanks with homes of given animals.

1. A lion lives in a _____.
2. An elephant lives in a _____.
3. A frog lives in a _____.
4. A hen lives in a _____.

Q3. Match to make the correct pair.

- | | |
|-----------|--------|
| 1. Shoes | thread |
| 2. Needle | socks |
| 3. Hammer | fork |
| 4. Knife | nail |

Q4. Why are the children of Class 2 excited?

Ans.

Q5. What does a soldier do for his country?

Ans.

Q6. How does a gardener help to make our world beautiful?

Ans.

Q7. Which tree did Tilly sleep on?

Ans.

Q8. Who were Filly, Tilly and Milly?

Ans.

Q9. Unscramble the letters to find the correct word.

a. Rapegs



b. Bownair



c. Otamot



d. Utterbfly



Assignment: 1 **Subject: Hindi** **Class: II** **Teacher: Mrs. Meetu Beaspal**
Name: _____ Class & Sec. _____ Roll No. _____ Date: _____

प्र 1. पंक्तियाँ पूरी करो

1. पूरब का दरवाज़ा खोल
धीरे-धीरे सूरज गोल
-

2. उड़ते उड़ते जूता उनका
-

इब्र बतूता खड़े रह गए
मोची की दुकान में।

प्र 2. निम्नलिखित शब्दों के अर्थ लिखो

1. मनपसंद _____
2. तीखी _____

प्र 3. निम्नलिखित शब्दों के वचन बदलो

1. गुब्बारा _____
2. कपडा _____

प्र 4. दिए गए शब्दों के विलोम शब्द लिखो

1. पक्का _____
2. खुश _____



प्र 5. समांतुक शब्द लिखो

1. माला _____
2. छोटा _____

प्र 6. निम्नलिखित शब्दों के समानार्थक शब्द लिखो

1. वायु _____
2. महिला _____

प्र 7. चित्र पहचानकर पशु अथवा पक्षी का नाम लिखो



प्र 8. खाली स्थान भरो (में, मैं)

1. जग _____ पानी है ।
2. _____ रोज़ पढ़ती हूँ ।

प्र 9. निम्नलिखित शब्दों से वाक्य बनाओ

1. मित्र _____
2. पेड़ _____
3. खेलौना _____
4. आम _____

प्र 10. प्रश्नों के उत्तर लिखो

1. मीठू कहाँ रहता था ?

2. खुली हवा में भागना - दौड़ना क्यों जरूरी है ?

प्र 1. पंक्तियाँ पूरी करो

1. गाती है चिड़ियाँ सारी
खिलाती है कलियाँ प्यारी
दिन साड़ी पर चढ़ता है

-
2. इब्र बतूता पहन के जूता
-

प्र 2. निम्नलिखित शब्दों के अर्थ लिखो

1. उपाय
2. रसीला

प्र 3. निम्नलिखित शब्दों के वचन बदलो

1. दुकान
2. खिलौना

प्र 4. दिए गए शब्दों के विलोम शब्द लिखो

1. दोस्त
2. निचे


प्र 5. समांतुक शब्द लिखो

1. अगर
2. लहर

प्र 6. निम्नलिखित शब्दों के समानार्थक शब्द लिखो

1. धन
2. जल

प्र 7. चित्र पहचानकर पशु अथवा पक्षी का नाम लिखो



प्र 8. खाली स्थान भरो (में, मैं)

1. मेरे घर में _____ कमरे है
2. _____ खाना खाता है

प्र 9. निम्नलिखित शब्दों से वाक्य बनाओ

1. कसरत _____
2. खुश _____
3. पार्क _____
4. मनपसंद _____

प्र 10. प्रश्नो के उत्तर लिखो

1. पाठ- मीठू और कौरा से हमें क्या शिक्षा मिलती है?

2. साँवरी और मनु खिलौनों से क्यों नहीं खेलते ?

Revision-1

Subject: - Mathematics Class:-II

Teacher:-Mrs. Paramjeet Kaur

Name:- _____ Class & Sec.:- _____

Roll No.:- _____ Date:- _____

1) Write the place value of the underlined digits.

1) 2 6 1 = 60 _____

2) 4 75 = _____

3) 1 3 1 = _____

4) 3 5 5 = _____

2) Write the expanded form.

1) 217 = _____ + _____ + _____

2) 132 = _____ + _____ + _____

3) 555 = _____ + _____ + _____

4) 209 = _____ + _____ + _____

3) Write the numbers.

1) $600+30+9$ = _____

2) $200+00+4$ = _____

3) $400+50+0$ = _____

4) $300+90+5$ = _____

4) Compare

a) Priya has 120 sweets. Shweta has 103 sweets. Who has more sweets? _____

b) Jack has 125 mangoes. Rose has 155 mangoes. Who has less mangoes? _____

c) Tom has 181 pencils. Jerry has 118 pencils. Who has more pencils? _____

5) Arrange the numbers in decreasing order

a) 144, 166, 199, 155, 188

b) 187, 150, 105, 175, 157

6) Arrange the numbers in increasing order.

a) 198, 108, 189, 180, 188

b) 124, 100, 150, 169, 200

7) Complete the missing numbers.

a) 189____191, 192,____.

b) 156, 157,____,____,160.

c) 133, 134, 135,____,____.

8) What comes after, before and between

a. _____ 179 _____

b. _____ 199 _____

c. 134 _____ 136

d. 109 _____ 111

Worksheet: - 2 Subject: - Mathematics Class:-II

Teacher:-Mrs. Paramjeet Kaur Name:-_____ Class &

Sec.:-_____ Roll No.:-_____ Date:-

1) Add

$$\begin{array}{r}
 \text{H T O} \\
 \text{a) } 72 \\
 + 39 \\
 \hline
 \hline
 \end{array}$$

$$\begin{array}{r}
 \text{H T O} \\
 \text{b) } 95 \\
 + 56 \\
 \hline
 \hline
 \end{array}$$

$$\begin{array}{r}
 \text{H T O} \\
 \text{c) } 86 \\
 + 35 \\
 \hline
 \hline
 \end{array}$$

$$\begin{array}{r}
 \text{H T O} \\
 \text{d) } 67 \\
 + 40 \\
 \hline
 \hline
 \end{array}$$

2)

$$\begin{array}{r}
 \text{H T O} \\
 14 \\
 25 \\
 + 89 \\
 \hline
 \hline
 \end{array}$$

$$\begin{array}{r}
 \text{H T O} \\
 50 \\
 23 \\
 + 47 \\
 \hline
 \hline
 \end{array}$$

$$\begin{array}{r}
 \text{H T O} \\
 19 \\
 31 \\
 + 62 \\
 \hline
 \hline
 \end{array}$$

$$\begin{array}{r}
 \text{H T O} \\
 46 \\
 15 \\
 + 44 \\
 \hline
 \hline
 \end{array}$$

$$\begin{array}{r}
 \text{H T O} \\
 33 \\
 33 \\
 + 63 \\
 \hline
 \hline
 \end{array}$$

3) Word Sums

a) A basket has 15 mangoes, 22 apples, 33 oranges. How many fruits are there in all?

Ans:- a) No. of Mangoes 1 5

No. of Apples 2 2

No. of Oranges	+ 3 3
<hr/>	
Total Fruits	7 0
<hr/>	

b) John eats 24 candies, 13 lollies and 17 jellies. How many sweets did he eat in all?

Ans:-b)

T

O

_____	_____	_____
_____	_____	_____
_____ +	_____	_____

c) Riya bought 35 red masks, 20 blue masks and 27 white masks. How many masks did she buy in all?

Ans.:- c)

	T	O
_____	_____	_____
_____	_____	_____
_____ +	_____	_____

4) Write odd number between

a. 23, _____, _____, _____, 31

b. 47, _____, _____, _____, 55

5) Write even numbers between

a. 20, _____, _____, _____, 28

b. 52, _____, _____, _____, 60

6) Complete the tables

a. $6 \times 5 =$ _____

b. $4 \times 7 =$ _____

c. $3 \times 9 =$ _____

d. $5 \times 5 =$ _____

e. $2 \times 6 =$ _____

f. $10 \times 10 =$ _____

7) Write number names of the following

a. 121 _____

b. 137 _____

c. 144 _____

d. 150 _____

Holiday Homework

Assignment: 1 **Subject:** Environmental Studies **Class:** II **Teacher:** Mrs. Meetu Beaspal

Name: _____ **Class & Sec.** _____ **Roll No.** _____ **Date:** _____

Revision Assignment

Q1. Fill in the blanks

1. A doctor uses a _____ to listen to our heartbeat.
2. We have food when we are _____.
3. We wear _____ when we go out in the rain.
4. House boats are called _____.

Q2. Write True or False

1. The brain, heart, lungs and stomach are inside our body _____
2. Food makes us strong and healthy _____
3. The thick hair on a sheep's body is called wool. _____
4. Bungalows are mostly found in villages. _____

Q3. Give Examples

1. Body parts _____, _____, _____
2. Uses of wool _____, _____, _____
3. Body building food _____, _____, _____
4. Materials used to build houses _____, _____, _____

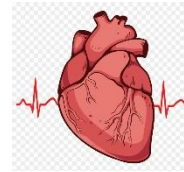
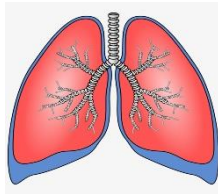
Q4. Match the following

- | | |
|------------|------------|
| 1. Heart | breathe |
| 2. Lungs | digest |
| 3. Stomach | pump blood |

Q5. Identify the following types of houses by looking at the pictures given below:



Q6. Identify the following body organs



Q7. Answer the following questions

1. How can we make our bones and muscles strong?

Ans. _____

2. Why should we eat food?

Ans. . _____

3. What do you mean by uniform?

Ans. . _____

4. What does a house protect us from?

Ans. . _____

Q8. Write three sentences on My Self'

1. . _____

2. . _____

3. . _____

Assignment: 2 Subject: Environmental Studies Class: II Teacher: Mrs. Meetu Beaspal

Name: _____ Class & Sec. _____ Roll No. _____ Date: _____

Revision Assignment

Q1. Fill in the blanks

1. The _____ protects the brain.
2. We have food when we are _____.
3. We wear cotton clothes in _____.
4. _____ Houses are found in places where it rains heavenly.

Q2. Write True or False for the following statements.

1. The brain helps us to think. _____
2. Body building food prevents us from falling sick _____
3. We wear different kinds of clothes in different seasons. _____
4. Caravans are used when people camp in the open. _____


Q3. Give examples

1. Internal body organs- _____, _____, _____
2. Kinds of food- _____, _____, _____
3. People with uniforms- _____, _____, _____
4. Type of houses- _____, _____, _____



Q4. Match the following

- | | |
|-----------|------------------|
| 1. Cotton | (a) silkworm |
| 2. Wool | (b) cotton plant |
| 3. Silk | (c) sheep |

Q5. Identify the following types of houses by looking at the pictures.



Q6. Identify the food and write its category.



Q7. Answer the following questions

1. What is Posture?

Ans. _____

2. What is a balanced diet?

Ans. _____

3. What is weaving?

Ans. _____

4. What are Kachcha houses?

Ans. _____

Q8. Write 3 sentences on myself.

1. _____

2. _____

3. _____